


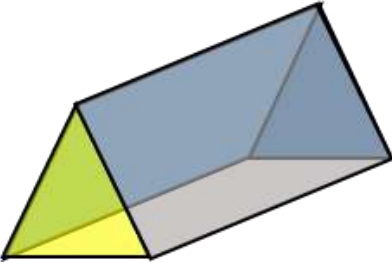
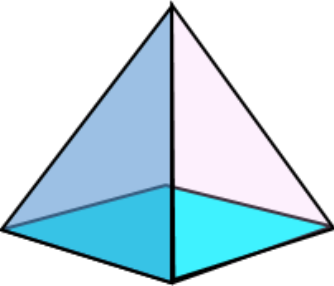
Name

Date



3D SHAPE PROPERTIES SHEET 2

For each shape, write down the number of faces, edges and vertices.

Shape	Properties
<p>Name of shape:</p> 	<p>Faces:</p> <p>Edges:</p> <p>Vertices:</p>
<p>Name of shape:</p> 	<p>Faces:</p> <p>Edges:</p> <p>Vertices:</p>
<p>Name of shape:</p> 	<p>Faces:</p> <p>Edges:</p> <p>Vertices:</p>


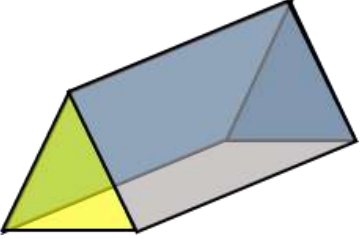
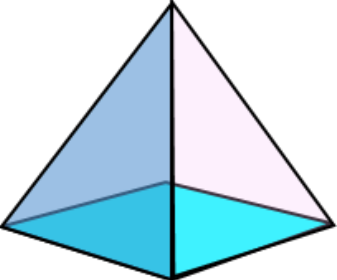


Name

Date



3D SHAPE PROPERTIES SHEET 2 ANSWERS

Shape	Properties
<p>Name of shape: triangular-based pyramid</p> 	<p>Faces: 4</p> <p>Edges: 6</p> <p>Vertices: 4</p>
<p>Name of shape: triangular prism</p> 	<p>Faces: 5</p> <p>Edges: 9</p> <p>Vertices: 6</p>
<p>Name of shape: square-based pyramid</p> 	<p>Faces: 5</p> <p>Edges: 8</p> <p>Vertices: 5</p>

