

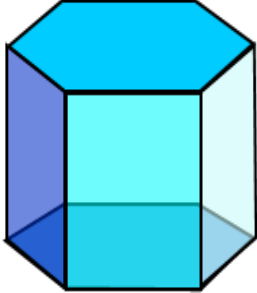
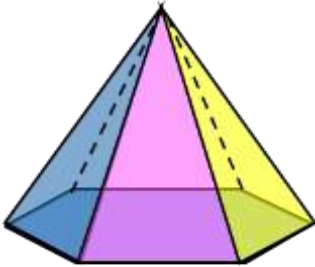
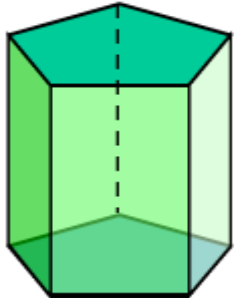
Name

Date



# 3D SHAPE PROPERTIES SHEET 4

For each shape, write down the number of faces, edges and vertices.

Shape	Properties
<p>Name of shape:</p> 	<p>Faces:</p> <p>Edges:</p> <p>Vertices:</p>
<p>Name of shape:</p> 	<p>Faces:</p> <p>Edges:</p> <p>Vertices:</p>
<p>Name of shape:</p> 	<p>Faces:</p> <p>Edges:</p> <p>Vertices:</p>

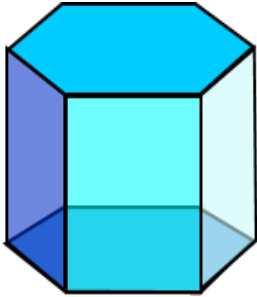
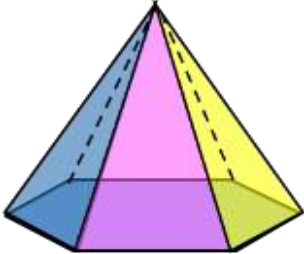
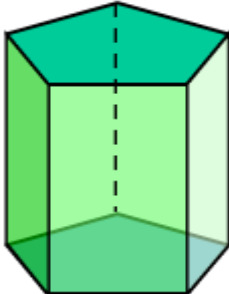


Name

Date



# 3D SHAPE PROPERTIES SHEET 4 ANSWERS

Shape	Properties
<p>Name of shape: <b>hexagonal prism</b></p> 	<p>Faces: <b>8</b></p> <p>Edges: <b>18</b></p> <p>Vertices: <b>12</b></p>
<p>Name of shape: <b>hexagonal based pyramid</b> or <b>hexagonal pyramid</b></p> 	<p>Faces: <b>7</b></p> <p>Edges: <b>12</b></p> <p>Vertices: <b>7</b></p>
<p>Name of shape: <b>pentagonal prism</b></p> 	<p>Faces: <b>7</b></p> <p>Edges: <b>15</b></p> <p>Vertices: <b>10</b></p>

