

Numbers 1 to 1000

Name: _____ Class: _____ Date: _____



Chapter

1

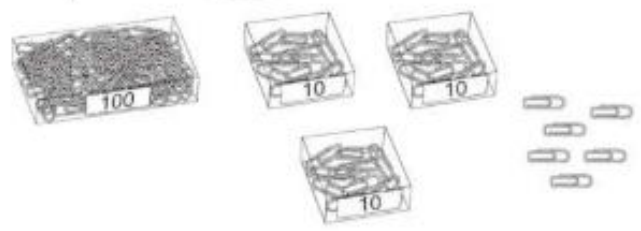
Numbers to 1000

Worksheet 1 Numbers to 1000




1. How many are there?

(a)



Numerals	
Words	

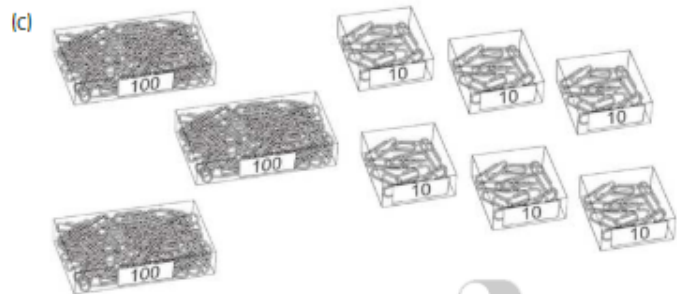
(b)



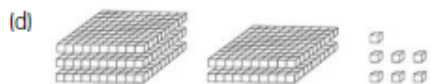
Numerals	
Words	



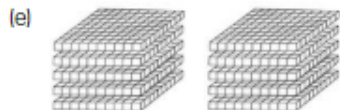
Press **Esc** to exit full screen



Numerals	
Words	



Numerals	
Words	



Numerals	
Words	

2. Match.

(a) five hundred and seventy

• 209

(b) seven hundred and forty-one

• 682

(c) three hundred and three

• 570

(d) six hundred and eighty-two

• 957

(e) nine hundred and fifty-seven

• 303

(f) two hundred and nine

• 741



3. Write these numbers in **numerals**.

(a)

two hundred and fifteen



(b)

four hundred and forty



(c)

five hundred and thirty-four



(d)

seven hundred and ninety-one



4. Write these numbers in **words**.

(a)

903

(b)

310

(c)

445

(d)

808