

Place Value hundreds, tens
ones

Press **Esc** to exit full screen




Name: _____ Class: _____ Date: _____

Worksheet 4 Place value — Hundreds, tens and units

Refer to Textbook page 18

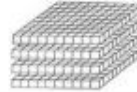

1. Write the missing numbers.

(a)

Hundreds	Tens	Units
		



_____ hundreds _____ tens _____ units = _____

(b)

Hundreds	Tens	Units
		

_____ hundreds _____ tens _____ units = _____

(c)

Hundreds	Tens	Units
		

_____ hundreds _____ tens _____ units = _____

2. Look at the pictures. Write the missing numbers.



Hundreds	Tens	Units



Hundreds	Tens	Units

3. How many of each of these do we need to get 758 beans? Fill in the blanks.



_____ bags of beans



_____ bags of beans



_____ beans



Press **Esc** to exit full screen

4. Fill in the blanks.

(a) $223 = \underline{\quad}$ hundreds $\underline{\quad}$ tens $\underline{\quad}$ units

(b) $549 = \underline{\quad}$ tens $\underline{\quad}$ units

(c) $304 = \underline{\quad}$ units

(d) $672 = \underline{\quad}$ hundreds $\underline{\quad}$ units

5. Fill in the blanks.

(a) 3 hundreds 2 tens 4 units = $\underline{\quad}$

(b) 57 tens 2 units = $\underline{\quad}$

(c) 106 units = $\underline{\quad}$

(d) 6 hundreds 9 units = $\underline{\quad}$

6. Match.

3 hundreds 2 tens 0 units

3 hundreds 0 tens 2 units

302

203

32

320

7. Fill in the blanks.

(a)



In the number shown,

(i) the digit 4 is in the $\underline{\quad}$ place.

(ii) the value of the digit 4 is $\underline{\quad}$.

(iii) the value of the digit 8 is $\underline{\quad}$.

(iv) the digit $\underline{\quad}$ is in the units place.

(b)



In the number shown,

(i) the digit $\underline{\quad}$ is in the hundreds place.

(ii) the value of the digit 9 is $\underline{\quad}$.

(iii) the value of the digit 7 is $\underline{\quad}$.

(iv) the digit 8 is in the $\underline{\quad}$ place.

8. Colour the numbers that have **both** 5 in the hundreds place and 2 in the units place.

522

255

520

525

552

252

