


# Elapsed time - half hours

## Grade 2 Time Worksheet


Draw the clock hands to show the time it will be.

1.




What time will it be in 2 hours 30 minutes?

2.




What time will it be in 1 hour 0 minutes?

3.




What time will it be in 3 hours 0 minutes?

4.




What time will it be in 4 hours 0 minutes?

5.



What time will it be in 1 hour 0 minutes?

6.

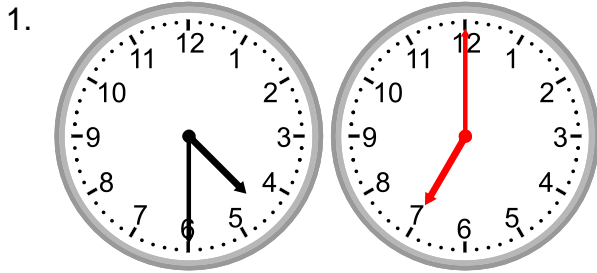


What time will it be in 3 hours 0 minutes?


# Elapsed time - half hours

## Grade 2 Time Worksheet


Draw the clock hands to show the time it will be.




What time will it be in 2 hours 30 minutes?



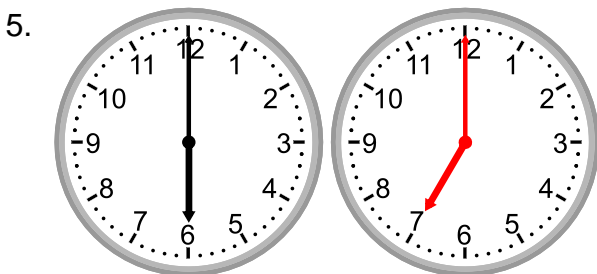
What time will it be in 1 hour 0 minutes?



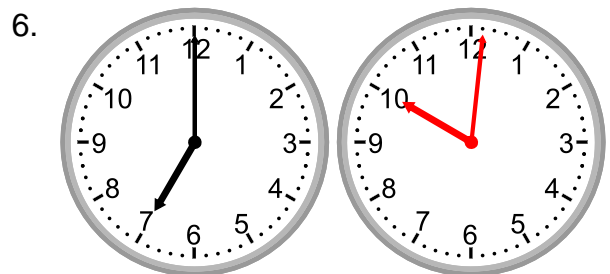
What time will it be in 3 hours 0 minutes?



What time will it be in 4 hours 0 minutes?



What time will it be in 1 hour 0 minutes?




What time will it be in 3 hours 0 minutes?

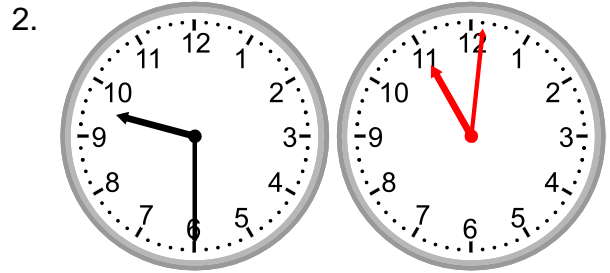
# Elapsed time - half hours

## Grade 2 Time Worksheet


Draw the clock hands to show the time it will be.




What time will it be in 4 hours 30 minutes?




What time will it be in 1 hour 30 minutes?




What time will it be in 1 hour 0 minutes?



What time will it be in 4 hours 0 minutes?



What time will it be in 1 hour 30 minutes?



What time will it be in 4 hours 30 minutes?