




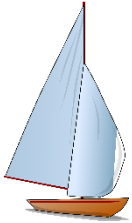










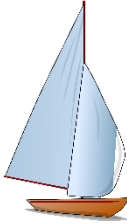



Metric units of length: centimeters, meters and kilometers

Grade 3 Measurement Worksheet

Circle the proper unit for each of the following.

<p>Distance between two continents</p> 	<p>Distance of a marathon race</p> 	<p>Length of a baby's feet</p> 
cm / m / km	cm / m / km	cm / m / km
<p>Length of a dolphin</p> 	<p>Width of a towel</p> 	<p>Length of a sailboat</p> 
cm / m / km	cm / m / km	cm / m / km
<p>Size of a frying pan</p> 	<p>Length of golf course</p> 	<p>Height of door</p> 
cm / m / km	cm / m / km	cm / m / km

Answers:

<p>Distance between two continents</p> 	<p>Distance of a marathon race</p> 	<p>Length of a baby's feet</p> 
km	km	cm
<p>Length of a dolphin</p> 	<p>Width of a towel</p> 	<p>Length of a sailboat</p> 
m	cm	m
<p>Size of a frying pan</p> 	<p>Length of golf course</p> 	<p>Height of door</p> 
cm	m	m